

Solutions Exam Dynamica, 28-1-2005

1. a. $\frac{1}{2}mv_0^2 - 0 = -mg(0-R) \Rightarrow v_0 = \sqrt{2gR}$

Note that the track cannot do work: there is no friction
 \Leftrightarrow only normal force perpendicular to the direction of movement

1. b. The particle will reach the highest point B only if gravity in B will not exceed the centripetal force; its velocity v_B now follows from:

$$mg = \frac{mv_B^2}{R} \Rightarrow v_B = \sqrt{gR}$$

This means that the kinetic energy below should be:

$$\begin{aligned} U_{k, \text{below}} &= U_{k, B} + \Delta U_{\text{pot}} = \frac{1}{2}mv_B^2 + mg(2R) = \\ &= \frac{1}{2}mgR + 2mgR = \frac{5}{2}mgR \end{aligned}$$

1. c

$$U_{\text{spring, before release}} = U_{k, \text{before entering loop}}$$

$$\frac{1}{2}k\delta^2 = \frac{1}{2}mv_0^2$$

Lower boundary: If the particle comes beyond A it will lose contact; below it won't:

$$\frac{1}{2}k\delta_{\text{min}}^2 = \frac{1}{2}mv_0^2 = mgR \Rightarrow \delta_{\text{min}} = \sqrt{\frac{2mgR}{k}}$$

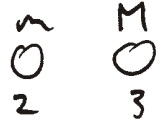
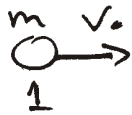
Upper boundary: The particle will make the complete loop if it reaches B (see 1b); otherwise it will leave the track. So:

$$\frac{1}{2}k\delta_{\text{max}}^2 = \frac{5}{2}mgR \Rightarrow \delta_{\text{max}} = \sqrt{\frac{5mgR}{k}}$$

Therefore:

$$\sqrt{\frac{2mgR}{k}} < \delta < \sqrt{\frac{5mgR}{k}}$$

2. a. $M \leq m$. Use formulas 6-24 and 6-25
 or momentum + kin. energy conservation



$w =$ after collision 2
 $u =$ after collision 1
 $v =$ before collision 1

$$1 \rightarrow 2: u_1 = 0, u_2 = v_0 \quad (u_3 = 0)$$

$$2 \rightarrow 3: w_1 = 0, w_2 = \frac{m-M}{m+M} v_0$$

$$w_3 = \frac{2m}{m+M} v_0$$

if $M \leq m$ then $w_2 = \frac{m-M}{m+M} v_0 \geq 0$, so both the 2nd and the 3rd particle move to the right and will not collide again.

2. b. $M > m$: particle 3: will move as in a.
 particle 2: will move in negative direction and collide with particle 1 again.
 Since 1 and 2 have the same mass this leads to a switch in velocities:


There are three collisions and the final velocities are:

$$w_1 = -\frac{(M-m)}{m+M} v_0 \quad (\text{moves to left})$$

$$w_2 = 0$$

$$w_3 = \frac{2m}{m+M} v_0 \quad (\text{moves to right})$$

2. c Completely inelastic means: all particles stick together after collision:



Momentum conservation: $mv_0 = (2m+M)u \Rightarrow$

$$u = \frac{m}{2m+M} v_0$$

$$\text{Energy loss: } \Delta K_k = \frac{1}{2} m v_0^2 - \frac{1}{2} (2m+M) u^2 =$$

$$= \frac{1}{2} m v_0^2 - \frac{1}{2} (2m+M) \frac{m^2 v_0^2}{(2m+M)^2} = \frac{1}{2} \left(m - \frac{m^2}{2m+M} \right) v_0^2 =$$

$$= \frac{1}{2} \frac{m(m+M)}{2m+M} v_0^2$$

3 a:

$$I_{\text{cylinder}} = \frac{1}{2} m r^2$$

$m = \text{mass}$ $r = \text{radius}$

$$m = \rho \pi r^2 l \quad l = \text{length}$$

$$I_{\text{tot}} = \frac{1}{2} (\rho \pi R^2 L) R^2 - 6 \left(\frac{1}{2} (\rho \pi a^2 L) a^2 + (\rho \pi a^2 L) \left(\frac{R}{2} \right)^2 \right) - \frac{1}{2} (\rho \pi a^2 L) a^2 =$$

$$= \frac{1}{2} \rho \pi L (R^4 - 7a^4 - 3a^2 R^2)$$

$$M = \rho \pi R^2 L - 7 \rho \pi a^2 L \Rightarrow \Rightarrow$$

$$\rho \pi L = \frac{M}{R^2 - 7a^2}$$

$$I_{\text{tot}} = \frac{1}{2} M \frac{R^4 - 7a^4 - 3a^2 R^2}{R^2 - 7a^2}$$

3 b



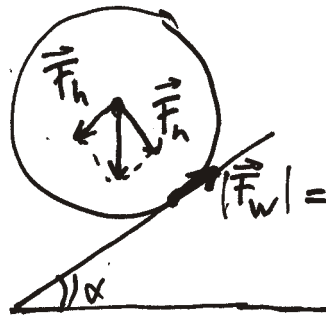
Determine torque + rotational inertia w.r. to the momentary stationary point A

$$I_{\text{tot}}^A = I_{\text{tot}} + MR^2 = \frac{1}{2} M \left(\frac{R^4 - 7a^4 - 3a^2 R^2}{R^2 - 7a^2} + 2 \frac{R^4 - 7a^2 R^2}{R^2 - 7a^2} \right) = \frac{1}{2} M \left(\frac{3R^4 - 7a^4 - 17a^2 R^2}{R^2 - 7a^2} \right)$$

$$I_{\text{tot}}^A \overset{\substack{\uparrow \\ \text{ang.} \\ \text{acceleratin}}}{\kappa} = \frac{I_{\text{tot}}^A a}{R} = F_h R \Rightarrow a = \frac{F_h R^2}{I_{\text{tot}}^A} =$$

$$= 2g \sin \alpha \frac{R^4 - 7a^2 R^2}{3R^4 - 7a^4 - 17a^2 R^2}$$

3 C.



$$\begin{aligned} F_h &= Mg \sin \alpha \\ F_n &= Mg \cos \alpha \end{aligned}$$

$$|F_w| = \mu N = \mu F_n$$

$$F_h - F_w = Ma$$

} \Rightarrow

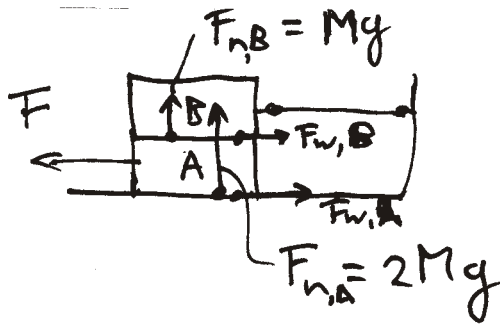
$$\begin{aligned} \mu &= \frac{F_w}{N} = \frac{F_w}{F_n} = \frac{F_h - Ma}{F_n} = \frac{Mg \sin \alpha - Ma}{Mg \cos \alpha} = \\ &= \frac{Mg \sin \alpha - \frac{Mg^2 \sin^2 \alpha R^2}{I_{tot}}}{Mg \cos \alpha} = \tan \alpha \left(1 - \frac{MR^2}{I_{tot}} \right) \end{aligned}$$

$$\begin{aligned} I_{tot}^* &= \frac{1}{2} M \left(\frac{3R^4 - 7a^2 + 17a^2 R^2}{R^2 - 7a^2} \right) = \\ &= \frac{1}{2} M \frac{1.966 \cdot 10^{-3} - 5.670 \cdot 10^{-6} - 3.917 \cdot 10^{-4}}{2.56 \cdot 10^{-2} - 6.3 \cdot 10^{-3}} = \\ &= \frac{1}{2} M \frac{1.569 \cdot 10^{-3}}{1.93 \cdot 10^{-2}} = 4.06 \cdot 10^{-2} M \end{aligned}$$

$$\frac{MR^2}{I_{tot}^*} = \frac{R^2 M}{4.06 \cdot 10^{-2} M} = \frac{2.56 \cdot 10^{-2}}{4.06 \cdot 10^{-2}} = 0.6305$$

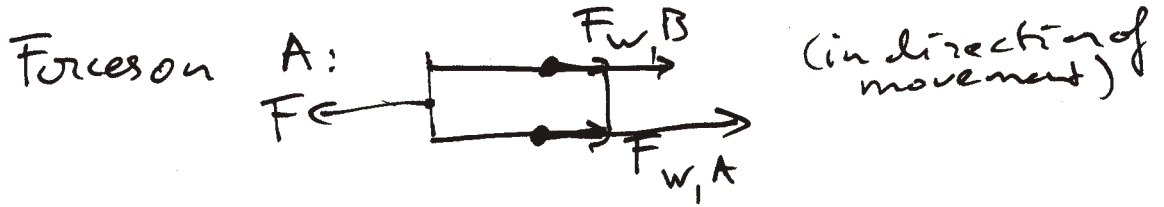
$$\begin{aligned} \mu &= \tan 20^\circ \left(1 - \frac{MR^2}{I_{tot}^*} \right) = 0.364 (1 - 0.6305) = \\ &= 0.134 \end{aligned}$$

4 a.



$$F_{w,A} = \mu \cdot F_{n,A} = 2\mu Mg$$

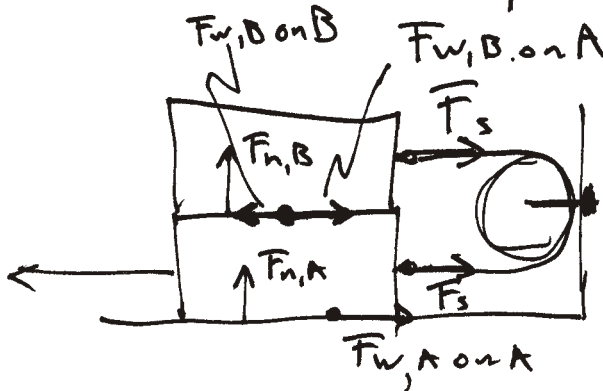
$$F_{w,B} = \mu \cdot F_{n,B} = \mu Mg$$



$$Ma = \sum F = F - F_{w,A} - F_{w,B} =$$

$$= F - 3\mu Mg \Rightarrow a = \frac{F - 3\mu Mg}{M}$$

4 b.



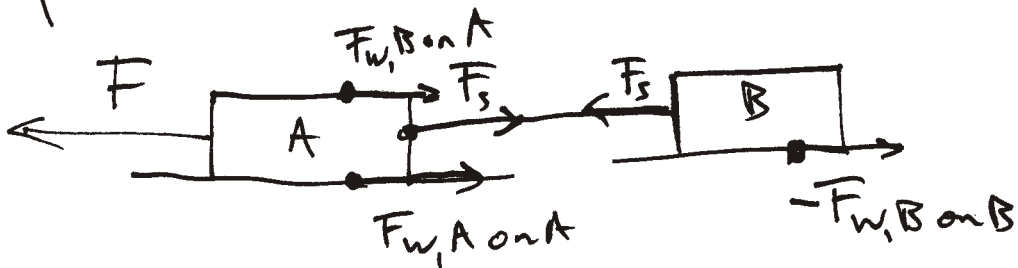
$$F_{w,B \text{ on } B} = -F_{w,B \text{ on } A}$$

$$= -\mu Mg$$

$$F_{w,B \text{ on } A} = \mu Mg$$

$$F_{w,A \text{ on } A} = 2\mu Mg$$

forces on the system as a whole (fold out!)



$$(M_A + M_B) a = F - (F_{w,B \text{ on } A} + F_{w,A \text{ on } A} + (-F_{w,B \text{ on } B})) =$$

$$= F - (\mu Mg + 2\mu Mg + \mu Mg) \Rightarrow$$

$$2Ma = -4\mu Mg + F \Rightarrow$$

$$a = \frac{F - 4\mu Mg}{2M}$$

5. a. COM: of disk: $(r_d + l_2)$
of rod: $l_2/2$.

$$r_{\text{COM}} = \frac{(r_d + l_{\text{rod}})m_d + \frac{l_2}{2} \cdot m_2}{m_d + m_2}$$

$$= \frac{(0.524 + 0.103) \cdot 488 + \frac{0.524 \cdot 4 \cdot 272}{2}}{488 + 272} =$$

$$= 49.6 \text{ cm}$$

5. b. $I_{\text{disk}} = \frac{1}{2} m_d r_d^2$ (around center)

$$I_{\text{disk}}^P = \frac{1}{2} m_d r_d^2 + m_d (r_d + l_2)^2 \quad (\text{around } P)$$

$$= \frac{1}{2} m_d r_d^2 + m_d r_d^2 + 2m_d r_d l_2 + m_d l_2^2$$

$$I_{\text{rod}} = \frac{1}{12} m_2 l_2^2 \quad (\text{around center})$$

$$I_{\text{rod}}^P = \frac{1}{12} m_2 l_2^2 + m_2 (l_2/2)^2 \quad (\text{around } P)$$

$$= \frac{1}{3} m_2 l_2^2$$

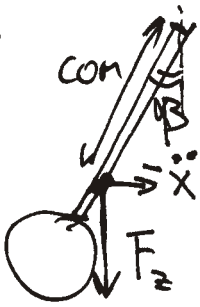
$$I_{\text{pendulum}} = I_{\text{disk}}^P + I_{\text{rod}}^P = \quad (\text{around } P)$$

$$= \frac{3}{2} m_d r_d^2 + 2m_d r_d l_2 + m_d l_2^2 + \frac{1}{3} m_2 l_2^2 =$$

$$= \frac{3}{2} m_d r_d^2 + 2m_d r_d l_2 + (m_d + \frac{1}{3} m_2) l_2^2 =$$

$$= 0.2193 \text{ kg m}^2$$

5. C.

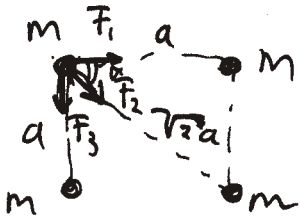


$$\begin{aligned}
 & \left. \begin{aligned}
 I_{F_g} &= r_{COM} \cdot F_g \cdot \sin \beta \\
 I_{COM} &= I_{pendulum} + r_{COM}^2
 \end{aligned} \right\} \tau_{F_g} = I \alpha \implies \\
 & \ddot{x} = \frac{-r_{COM} \cdot (m_2 + m_d) g \sin \beta}{I_{pendulum}} = \\
 & = - \frac{r_{COM} (m_2 + m_d) g}{I_{pendulum}} x
 \end{aligned}$$

$$\Rightarrow \omega = \sqrt{\frac{r_{COM} (m_2 + m_d) g}{I_{pendulum}}} = \frac{2\pi}{T} \Rightarrow$$

$$\begin{aligned}
 T &= 2\pi \sqrt{\frac{I_{pendulum}}{r_{COM} (m_2 + m_d) g}} = \\
 &= 2\pi \sqrt{\frac{0.219 \text{ kg m}^2}{0.496 \text{ m} \cdot 0.760 \text{ kg} \cdot 9.81 \text{ m/s}^2}} = \\
 &= 2\pi \cdot 0.243 \text{ s} = 1.53 \text{ s.}
 \end{aligned}$$

7 a.



$$F_1 = F_3 = G \frac{m^2}{a^2}$$

$$F_2 = G \frac{m^2}{(\sqrt{2}a)^2} = G \frac{m^2}{2a^2}$$

$$\begin{aligned} F_{\text{tot}} &= F_2 + 2F_1 \cos 45^\circ = \\ &= G \frac{m^2}{2a^2} + 2G \frac{m^2}{a^2} \frac{1}{\sqrt{2}} = \\ &= \left(\frac{1}{2} + \sqrt{2}\right) G \frac{m^2}{a^2} \end{aligned}$$

F_{tot} should be balanced by the centrifugal force \Rightarrow
 $F_c = m\omega^2 r = \frac{1}{2}\sqrt{2}a \cdot \frac{1}{2}\sqrt{2}m\omega^2 a$

$$\left(\frac{1}{2} + \sqrt{2}\right) G \frac{m^2}{a^2} = \frac{1}{2}\sqrt{2} m \omega^2 a \Rightarrow$$

$$\omega^2 = \sqrt{2} \left(\frac{1}{2} + \sqrt{2}\right) G \frac{m}{a^3} = \left(\frac{1}{2}\sqrt{2} + 2\right) G \frac{m}{a^3} \Rightarrow$$

$$T = \frac{2\pi}{\omega} = \frac{2\pi}{\sqrt{\left(\frac{1}{2}\sqrt{2} + 2\right) G \frac{m}{a^3}}}$$

7 b. Now $F_{\text{tot}} = \left(\frac{1}{2} + \sqrt{2}\right) G \frac{m^2}{a^2} + G \frac{Mm}{\left(\frac{1}{2}\sqrt{2}a\right)^2} = \boxed{\omega^2 = 5\omega}$

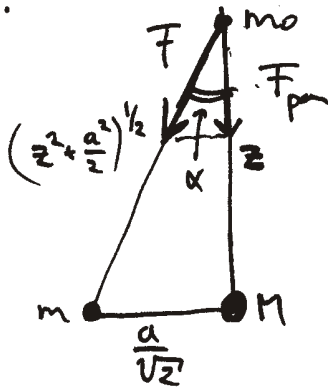
$$= \left(\frac{1}{2} + \sqrt{2}\right) G \frac{m^2}{a^2} + 2G \frac{Mm}{a^2} \Rightarrow$$

$$\underbrace{\frac{1}{2}\sqrt{2} m \omega^2 a}_{\frac{25}{2}\sqrt{2} m \omega^2 a} = \underbrace{\left(\frac{1}{2} + \sqrt{2}\right) G \frac{m^2}{a^2}}_{\frac{1}{2}\sqrt{2} m \omega^2 a} + 2G \frac{Mm}{a^2} \Rightarrow$$

$$M = \frac{a^3}{2G} \left(\frac{25}{2}\sqrt{2} - \frac{1}{2}\sqrt{2}\right) \omega^2 = 6\sqrt{2} \frac{a^3}{G} \omega^2 =$$

$$= 6\sqrt{2} \left(\frac{1}{2}\sqrt{2} + 2\right) \frac{a^3}{G} G \frac{m}{a^3} = (6 + 12\sqrt{2})m$$

7 c.



$$F = G \frac{m_0 m}{z^2 + \frac{a^2}{2}}$$

$$F_{\text{par}} = G \frac{m_0 m}{z^2 + \frac{a^2}{2}} \cos \alpha = G \frac{m_0 m z}{(z^2 + \frac{a^2}{2})^{3/2}}$$

$$F_{\text{tot}} = G \frac{m_0 M}{z^2} + 4G \frac{m_0 m z}{(z^2 + \frac{a^2}{2})^{3/2}}$$

$$(\text{=} F_{\text{Coulomb}} + 4F_{\text{par}})$$

7 d. Change in kinetic energy:

$$\Delta U_k = - \int_{z_0}^{R_0} F_{\text{tot}} dz = + \int_{R_0}^{z_0} G \frac{m_0 M}{z^2} dz$$

$$+ 4G m_0 m \int_{R_0}^{z_0} \frac{z dz}{(z^2 + \frac{a^2}{2})^{3/2}} = - G \frac{m_0 M}{z} \Big|_{R_0}^{z_0}$$

int
for $q=3/2$

$$- 4G m_0 m \frac{1}{2 \cdot \frac{1}{2}} \cdot \frac{1}{(z^2 + \frac{a^2}{2})^{1/2}} \Big|_{R_0}^{z_0} = G m_0 M \left(\frac{1}{R_0} - \frac{1}{z_0} \right)$$

$$+ 4G m_0 m \left(\frac{1}{\sqrt{R_0^2 + \frac{a^2}{2}}} - \frac{1}{\sqrt{z_0^2 + \frac{a^2}{2}}} \right) = \frac{1}{2} m_0 v^2$$

$$\Rightarrow v = \sqrt{2G} \left(\sqrt{M \left(\frac{1}{R_0} - \frac{1}{z_0} \right) + 4m \left(\frac{1}{\sqrt{R_0^2 + \frac{a^2}{2}}} - \frac{1}{\sqrt{z_0^2 + \frac{a^2}{2}}} \right)} \right)$$

$$= \sqrt{2Gm} \sqrt{\left(6 + \frac{12}{\sqrt{2}} \right) \left(\frac{1}{R_0} - \frac{1}{z_0} \right) + 4 \left(\frac{1}{\sqrt{R_0^2 + \frac{a^2}{2}}} - \frac{1}{\sqrt{z_0^2 + \frac{a^2}{2}}} \right)}$$

$$= 2 \sqrt{2Gm} \sqrt{\left(\frac{3}{2} + \frac{3}{\sqrt{2}} \right) \left(\frac{1}{R_0} - \frac{1}{z_0} \right) + \left(\frac{1}{\sqrt{R_0^2 + \frac{a^2}{2}}} - \frac{1}{\sqrt{z_0^2 + \frac{a^2}{2}}} \right)}$$